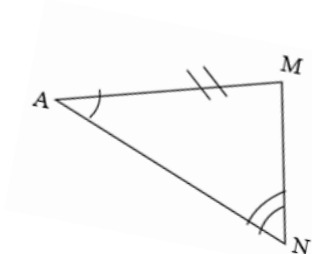
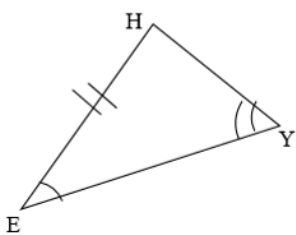


CPCTC

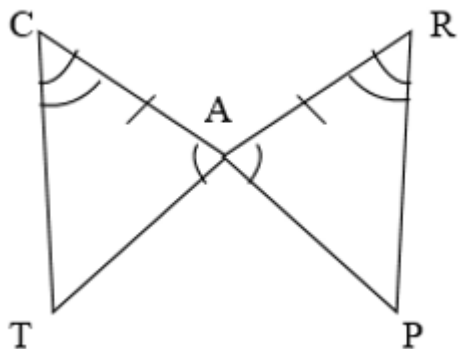
Name: \_\_\_\_\_

1.  $\triangle HEY \cong \triangle MAN$  by \_\_\_\_\_. List all 3 pairs of corresponding sides and all 3 pairs of corresponding angles.



Sides		Angles	
$\overline{HE}$	$\overline{MA}$	$\angle HEY$	$\angle MAN$
$\overline{HY}$	$\overline{MN}$	$\angle EYH$	$\angle ANM$
$\overline{EY}$	$\overline{AN}$	$\angle YHE$	$\angle NMA$

2.  $\triangle CAT \cong \triangle RAP$  by \_\_\_\_\_. List all 3 pairs of corresponding sides and all 3 pairs of corresponding angles.



Sides		Angles	
$\overline{CA}$	$\overline{RA}$	$\angle CAT$	$\angle RAP$
$\overline{AT}$	$\overline{AP}$	$\angle ATC$	$\angle APR$
$\overline{CT}$	$\overline{RP}$	$\angle TCA$	$\angle PRA$