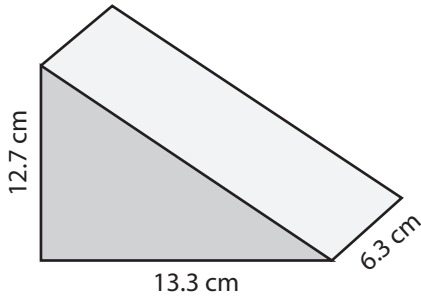


Volume of Prism

L1DS1

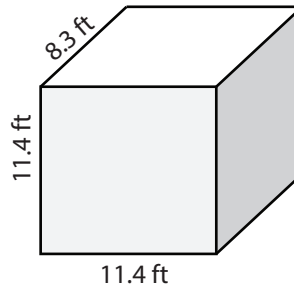
Find the volume of each prism. Round the answer to nearest tenth. (use $\pi = 3.14$)

1)



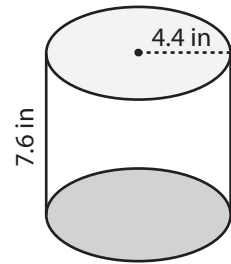
Volume = _____

2)



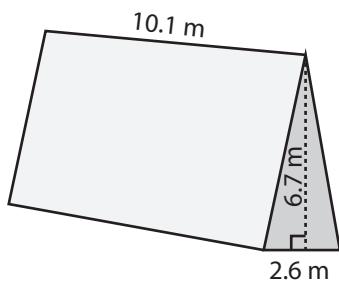
Volume = _____

3)



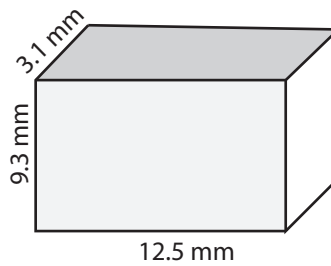
Volume = _____

4)



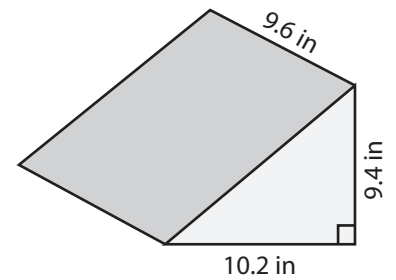
Volume = _____

5)



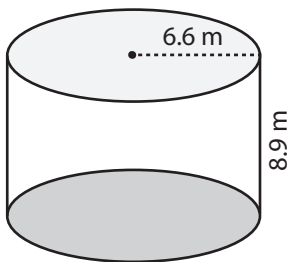
Volume = _____

6)



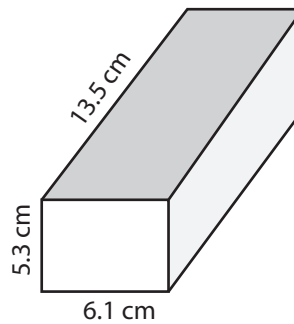
Volume = _____

7)



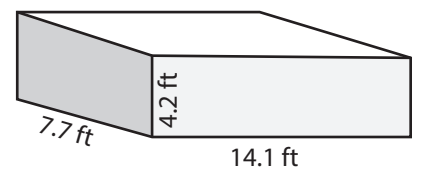
Volume = _____

8)



Volume = _____

9)



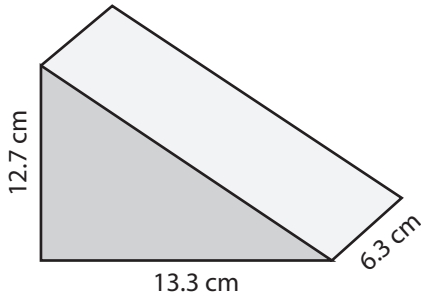
Volume = _____

Answer Key**Volume of Prism**

L1DS1

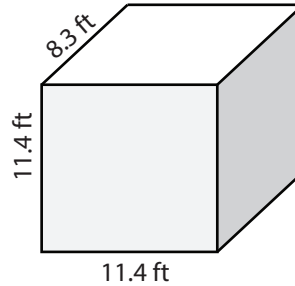
Find the volume of each prism. Round the answer to nearest tenth. (use $\pi = 3.14$)

1)



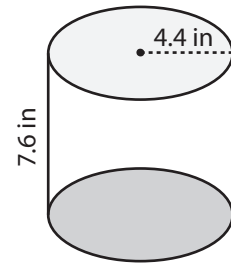
Volume = 532.1 cm³

2)



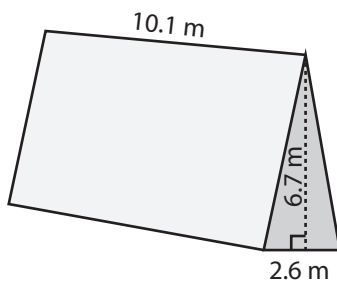
Volume = 1078.7 ft³

3)



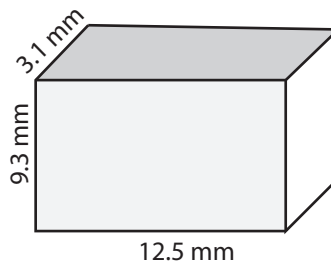
Volume = 462 in³

4)



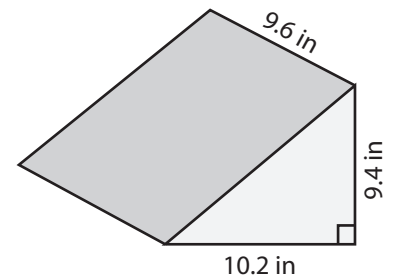
Volume = 88 m³

5)



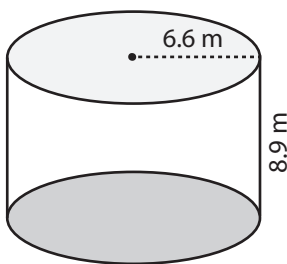
Volume = 360.4 mm³

6)



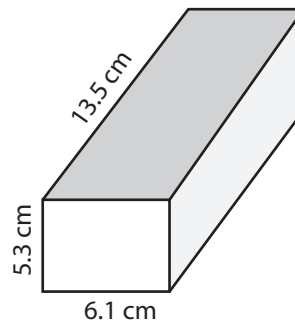
Volume = 460.2 in³

7)



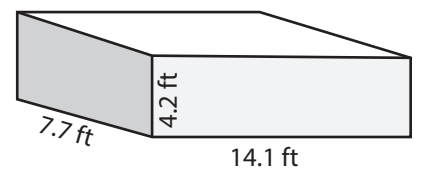
Volume = 1217.3 m³

8)



Volume = 436.5 cm³

9)



Volume = 456 ft³